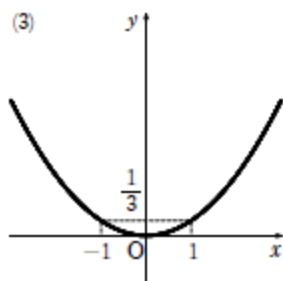
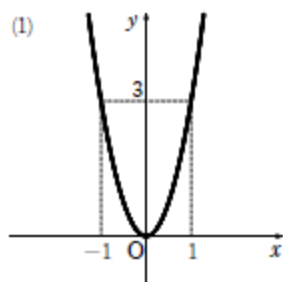


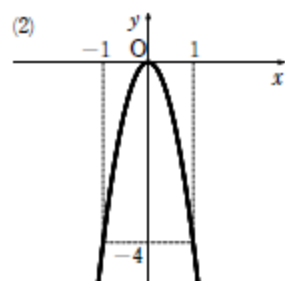
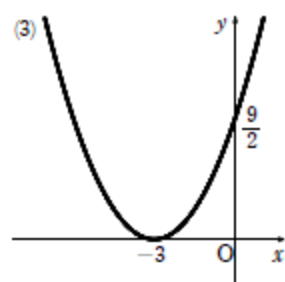
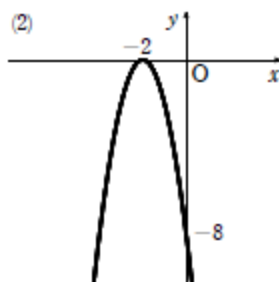
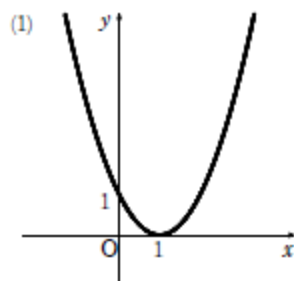
練習 6

- (1) 下に凸
- (2) 上に凸
- (3) 下に凸



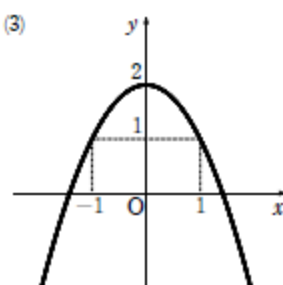
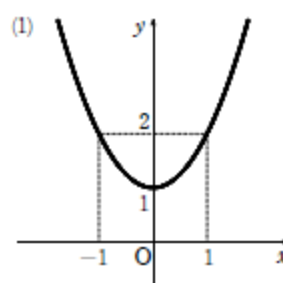
練習 9

- (1) 軸は直線 $x=1$,
頂点は点 $(1, 0)$
- (2) 軸は直線 $x=-2$,
頂点は点 $(-2, 0)$
- (3) 軸は直線 $x=-3$,
頂点は点 $(-3, 0)$



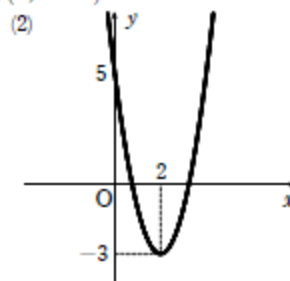
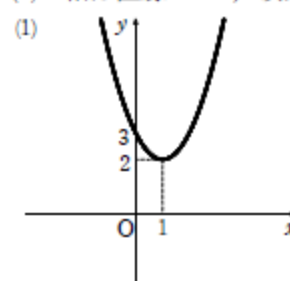
練習 8

- (1) 軸は y 軸,
頂点は点 $(0, 1)$
- (2) 軸は y 軸,
頂点は点 $(0, -3)$
- (3) 軸は y 軸,
頂点は点 $(0, 2)$



練習 10

- (1) 軸は直線 $x=1$, 頂点は点 $(1, 2)$
- (2) 軸は直線 $x=2$, 頂点は点 $(2, -3)$



- (3) 軸は直線 $x=-1$, 頂点は点 $(-1, -2)$
- (4) 軸は直線 $x=-2$, 頂点は点 $(-2, 5)$

